


Grade 3

Day 4

3<sup>rd</sup> Grade Snow packet for Ms. Z's Science/Social  
Studies Class

Name: \_\_\_\_\_

Date: \_\_\_\_\_



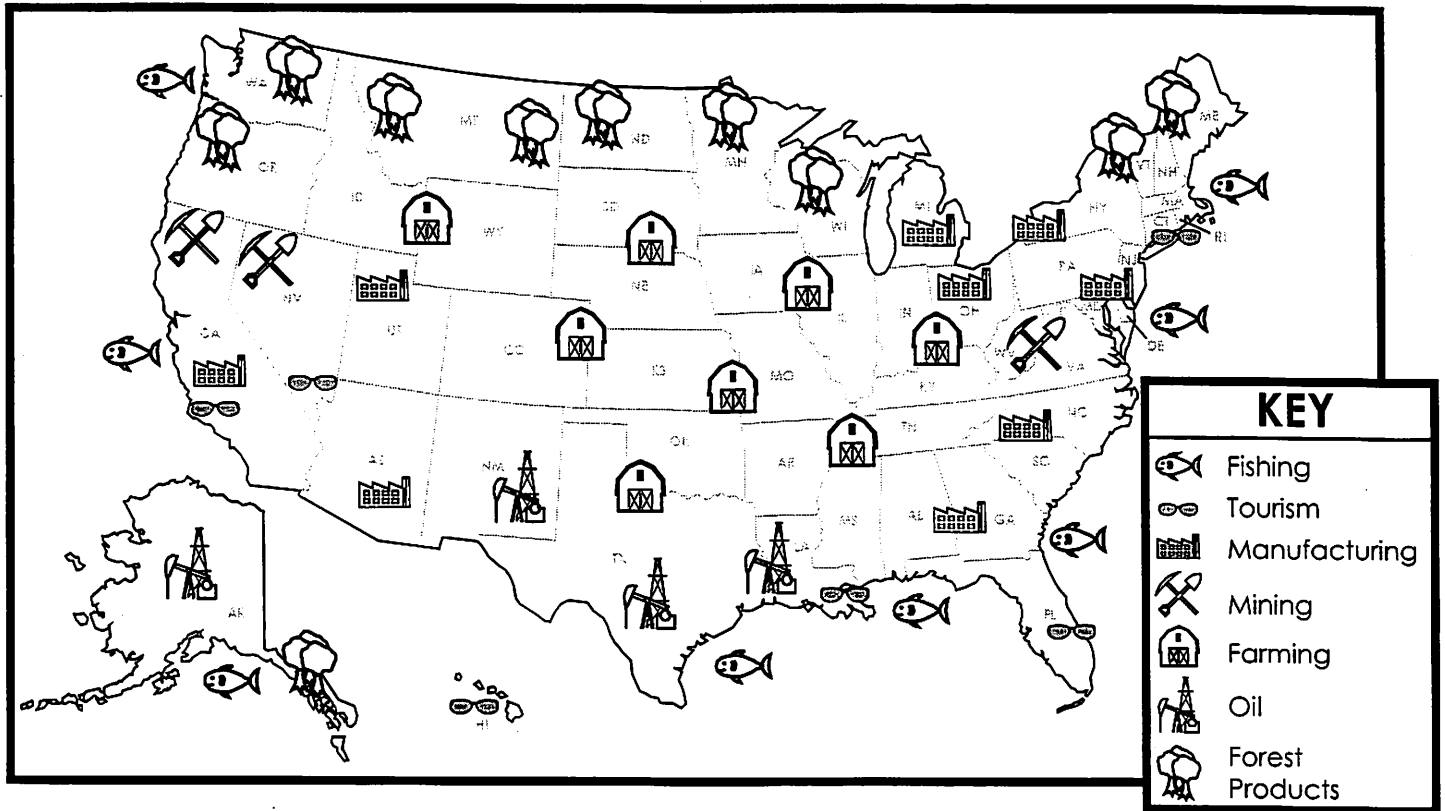
Entire packet must be turned in 2 days after a Non-  
Traditional Instructional Day!!!!!!!

Please do not separate packet or pages.

Please contact me on LiveGrades should you have  
any questions about your class material.

Name: \_\_\_\_\_

## Major Industries in the USA



1. Name 2 industries found in Nevada. \_\_\_\_\_
2. Name 3 industries found in Alaska. \_\_\_\_\_
3. Name all the states where oil is a major industry. \_\_\_\_\_  
\_\_\_\_\_  
\_\_\_\_\_
4. According to the map, which fact about tourism is true?
  - a. There is more tourism in the northern half of the U.S. than the southern half.
  - b. Tourism is a popular industry in New Mexico.
  - c. There is more tourism in the southern half of the U.S. than the northern half.
  - d. All popular tourist locations are on the ocean.
5. Where do most of the United States' forest products come from?
  - a. the northern part of the U.S.
  - b. the western part of the U.S.
  - c. California and Arizona
  - d. the New England states

Name: \_\_\_\_\_

# Dave's Beans

by Lois Sepahban



1. What was Dave's mother doing when she gave him the beans?
  - a. planting a garden
  - b. buying beans at the store
  - c. eating bean soup
  - d. making bean soup
  
2. What did Dave's mother say the beans needed to grow?  

---
  
3. Why is the jar important?
  - a. it has a lid to keep the plant inside
  - b. it keeps air out
  - c. it warms up the beans
  - d. beans grow better in jars than pots
  
4. How long were the beans in the jar when Dave first saw the shoots?  

---
  
5. What did Dave put in the jar?
  - a. soil, water, and beans
  - b. soil, plant food, and beans
  - c. a jar, water, and a napkin
  - d. water, beans, and a napkin

Name: \_\_\_\_\_

# Dave's Beans

by Lois Sepahban

Dave's mom made bean soup. She gave him three black beans.

"Let's watch them grow," said Dave.

"Beans need sun and water to grow," said Dave's mom. She gave him a jar.

First, Dave put a napkin in the jar. Next, he put some water on the napkin. Then, he put the beans on the napkin. Last, he put the lid on the jar.

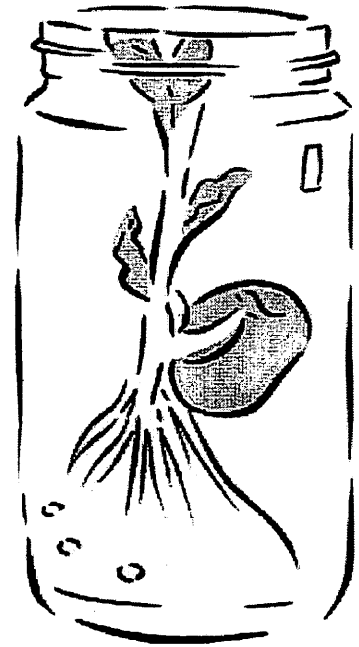
Dave set the jar near a window. The sun warmed the air in the jar. The air warmed the beans. In two days, Dave saw tiny white shoots.

"The beans sprouted," he said.

"The shoots will be the beans' roots," said Dave's mom.

The shoots grew long and green.

"I gave the plants what they need," said Dave.



## leaves

Leaves make food for the plant. They take in carbon dioxide and release oxygen into the air.

## flower

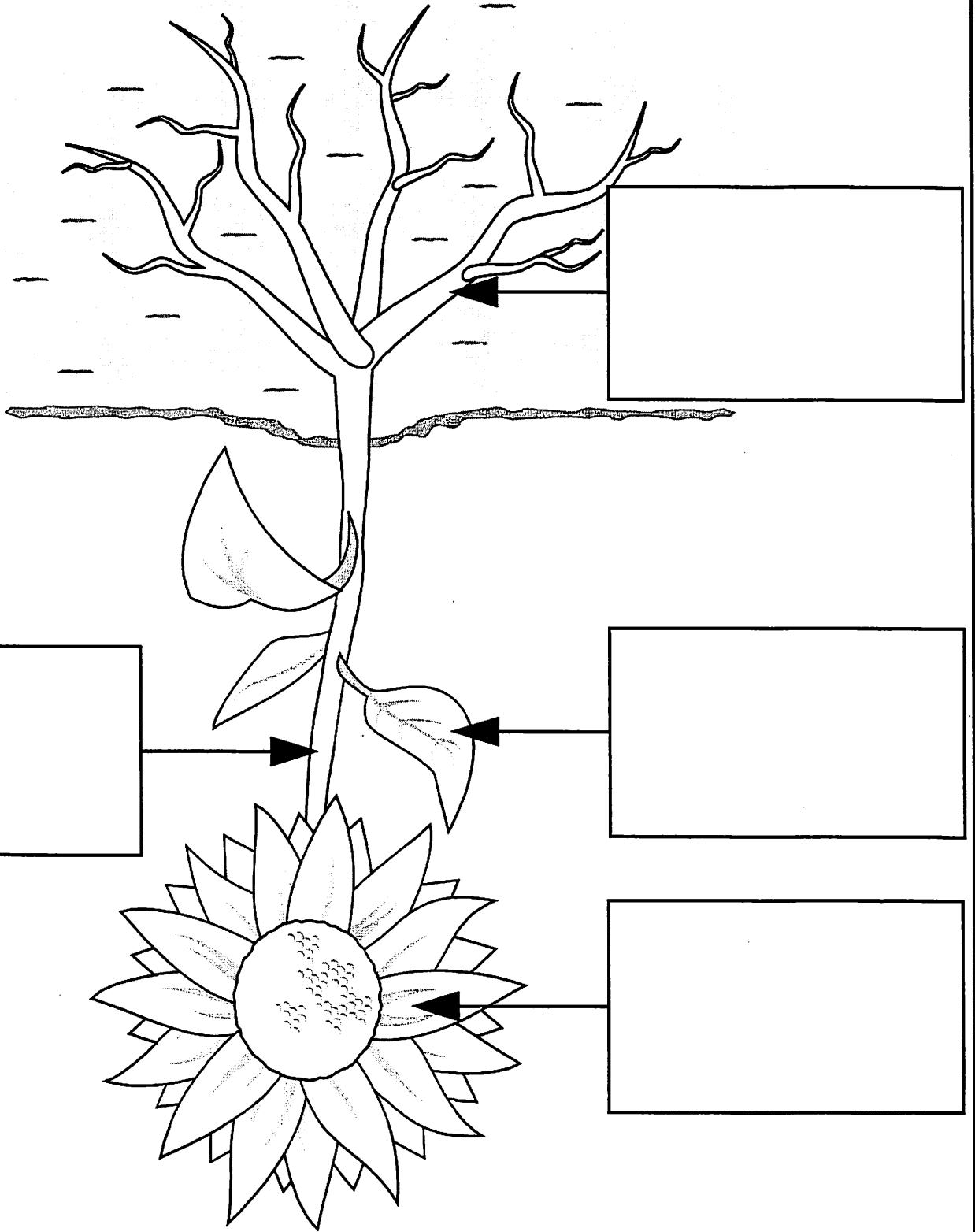
The flower makes seeds for the plant.

## stem

The stem supports the plant. It contains thin tubes for carrying food, minerals, and water through the plant.

## roots

The roots soak up water and minerals. They also store food for the plant.



Cut out the plant part definitions and glue them in the correct boxes.

# Parts of a Plant

Name: \_\_\_\_\_

Name: \_\_\_\_\_

# Where I Live

House number: \_\_\_\_\_

Street: \_\_\_\_\_

Town or city: \_\_\_\_\_

County: \_\_\_\_\_

State: \_\_\_\_\_

Country: \_\_\_\_\_

Continent: \_\_\_\_\_

Hemispheres: \_\_\_\_\_ and \_\_\_\_\_

Planet: \_\_\_\_\_

Draw a picture of your home.

Draw a map of your state.