


Grade 4

Day 5

Snow packet for Ms. Z's Science/Social Studies  
Class

Name: \_\_\_\_\_

Date: \_\_\_\_\_



Entire packet must be turned in 2 days after a Non-Traditional Instructional Day!!!!!!!

Please do not separate packet or pages.

Please contact me on LiveGrades should you have any questions about your class material.

<p>cheese</p> 	<p>paint</p> 	<p>air inside of a tire</p> 
<p>air inside of a soccer ball</p> 	<p>gasoline</p> 	<p>snowman</p> 
<p>carbon dioxide</p> 	<p>maple syrup</p> 	<p>airplane</p> 
<p>orange juice</p> 	<p>icles</p> 	<p>helium</p> 


gas

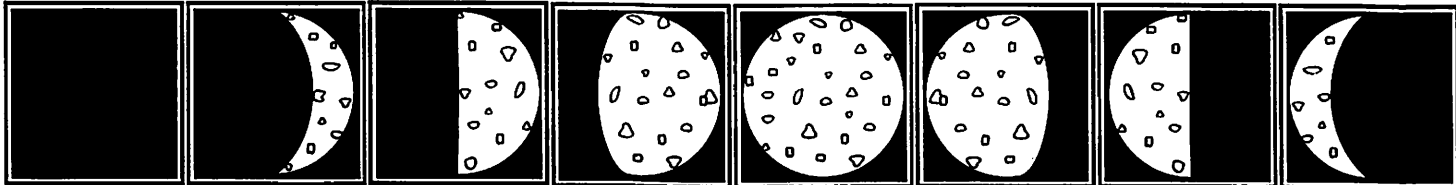

liquid


solid

Name: \_\_\_\_\_

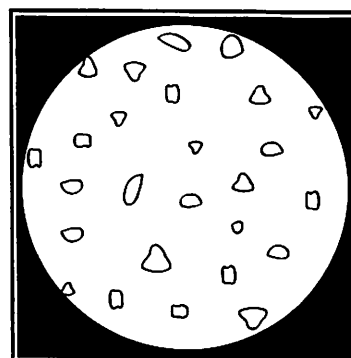


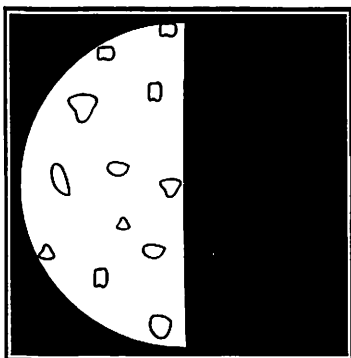
# Name the Moon Phase

## Moon Phases

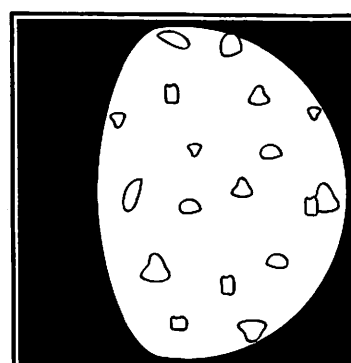

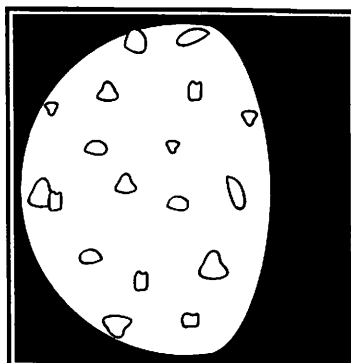
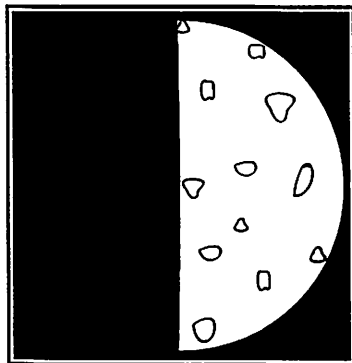


New Moon   Waxing Crescent   First Quarter   Waxing Gibbous   Full Moon   Waning Gibbous   Last Quarter   Waning Crescent

Fill in the correct Moon phase for each picture below.



\_\_\_\_\_




\_\_\_\_\_

Name: \_\_\_\_\_

# Compass Points

Cut out the direction names and glue them onto the compass rose.

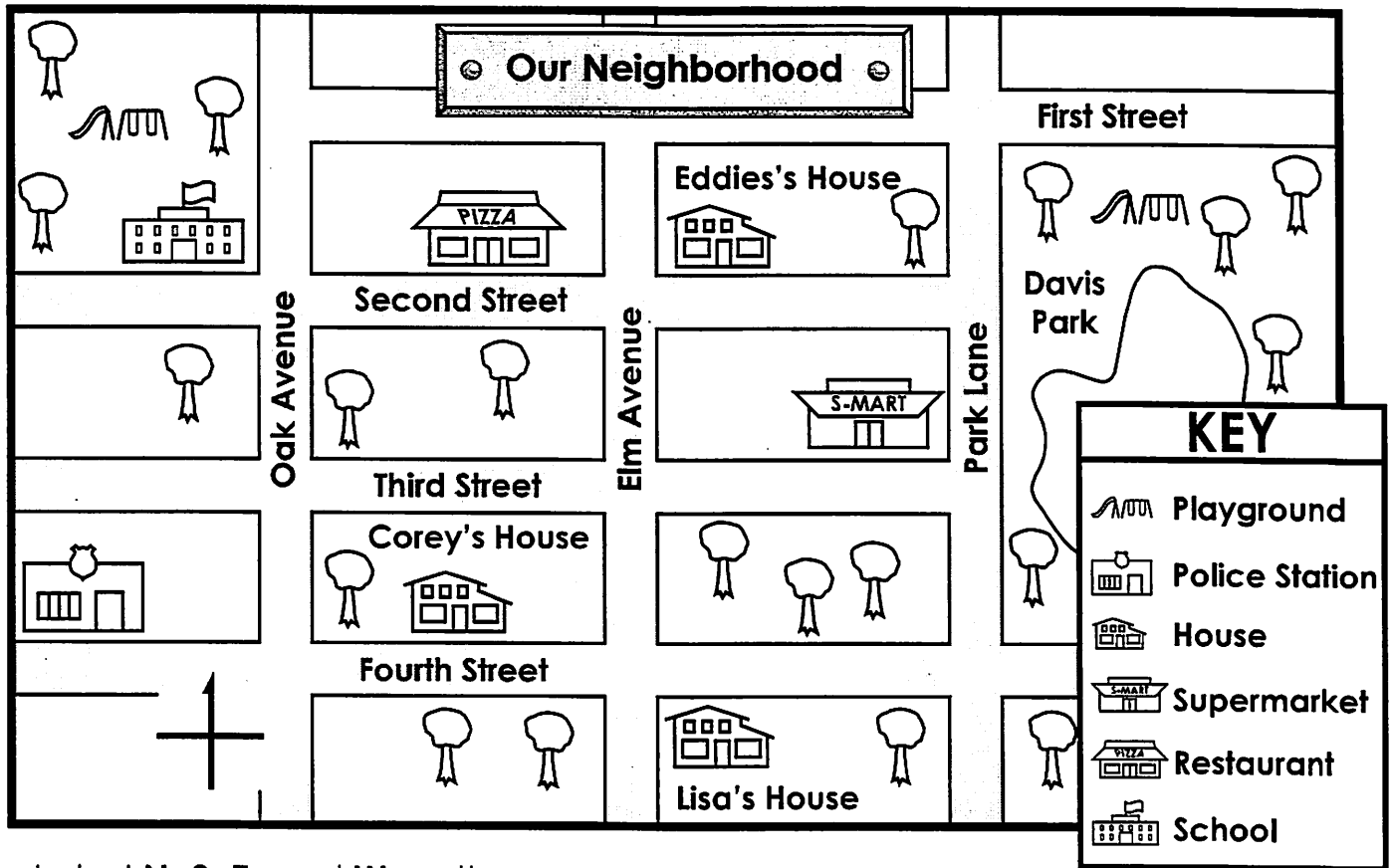


Super Teacher Worksheets - [www.superteacherworksheets.com](http://www.superteacherworksheets.com)

NORTH EAST	SOUTH	NORTH WEST	SOUTH EAST
WEST	EAST	SOUTH WEST	NORTH

Name: \_\_\_\_\_

## Reading a Map



1. Label **N**, **S**, **E**, and **W** on the compass rose.

Write **north**, **south**, **east**, or **west** to complete each sentence.

- To go from Eddie's house to the school, you travel \_\_\_\_\_.
- The supermarket is \_\_\_\_\_ of Lisa's house.
- A police officer would go \_\_\_\_\_ to Davis Park.
- Students walk \_\_\_\_\_ to the school after using the school playground.
- Corey goes \_\_\_\_\_ to eat at the restaurant.
- Eddie would walk \_\_\_\_\_ to use the Davis Park playground.
- Eddie would walk \_\_\_\_\_ to visit Lisa.