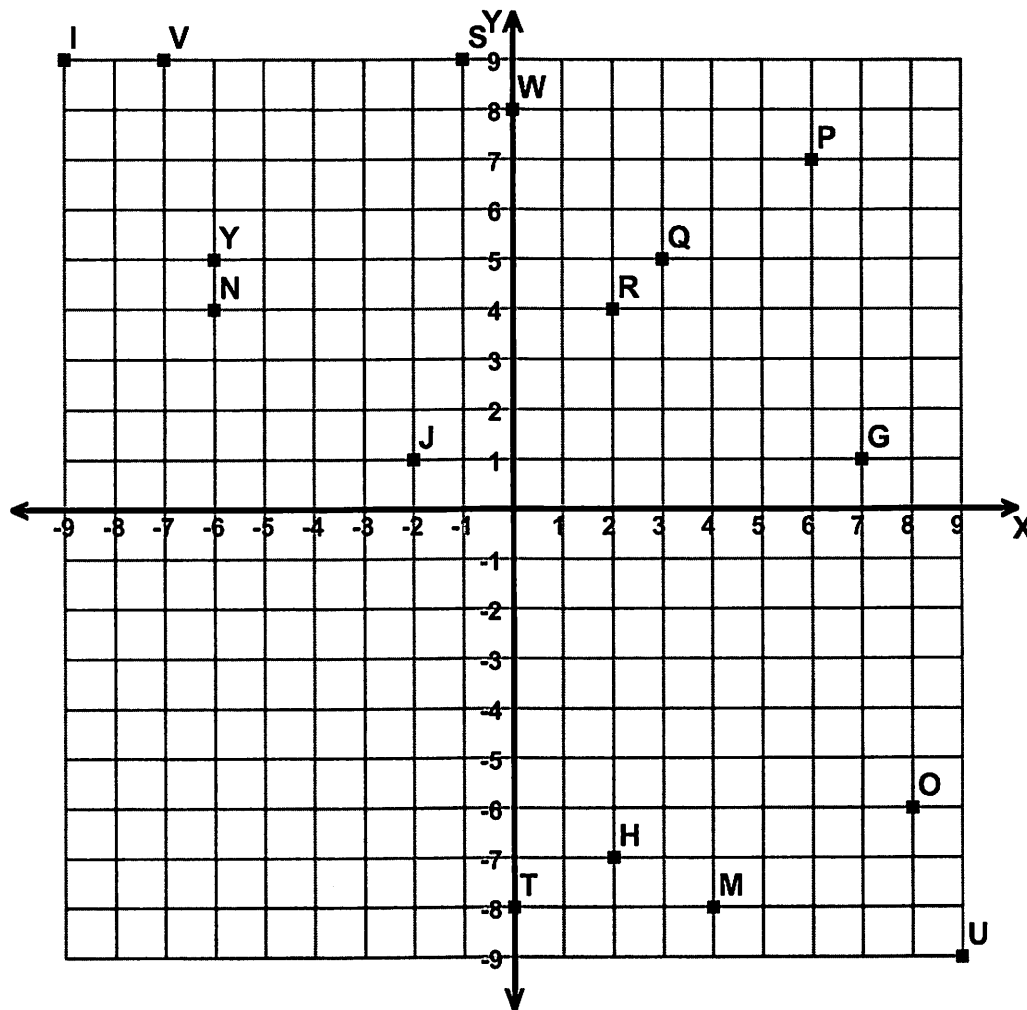


Name : \_\_\_\_\_ Score : \_\_\_\_\_

Teacher : \_\_\_\_\_ Date : \_\_\_\_\_

### Four Quadrant Ordered Pairs



Tell what point is located at each ordered pair.

- |                    |                    |                    |                    |
|--------------------|--------------------|--------------------|--------------------|
| 1) $(-7,+9)$ _____ | 3) $(-6,+4)$ _____ | 5) $(-9,+9)$ _____ | 7) $(+7,+1)$ _____ |
| 2) $(+2,+4)$ _____ | 4) $(-1,+9)$ _____ | 6) $(+9,-9)$ _____ | 8) $(-6,+5)$ _____ |

Write the ordered pair for each given point.

- |             |             |             |             |
|-------------|-------------|-------------|-------------|
| 9) P _____  | 11) O _____ | 13) W _____ | 15) M _____ |
| 10) Q _____ | 12) H _____ | 14) T _____ | 16) J _____ |

Plot the following points on the coordinate grid.

- |                 |                 |                 |                 |
|-----------------|-----------------|-----------------|-----------------|
| 17) C $(-7,+0)$ | 19) K $(+3,-8)$ | 21) X $(-4,-6)$ | 23) A $(+2,-3)$ |
| 18) Z $(+4,+0)$ | 20) L $(+9,+4)$ | 22) E $(+4,-7)$ | 24) F $(-8,-6)$ |



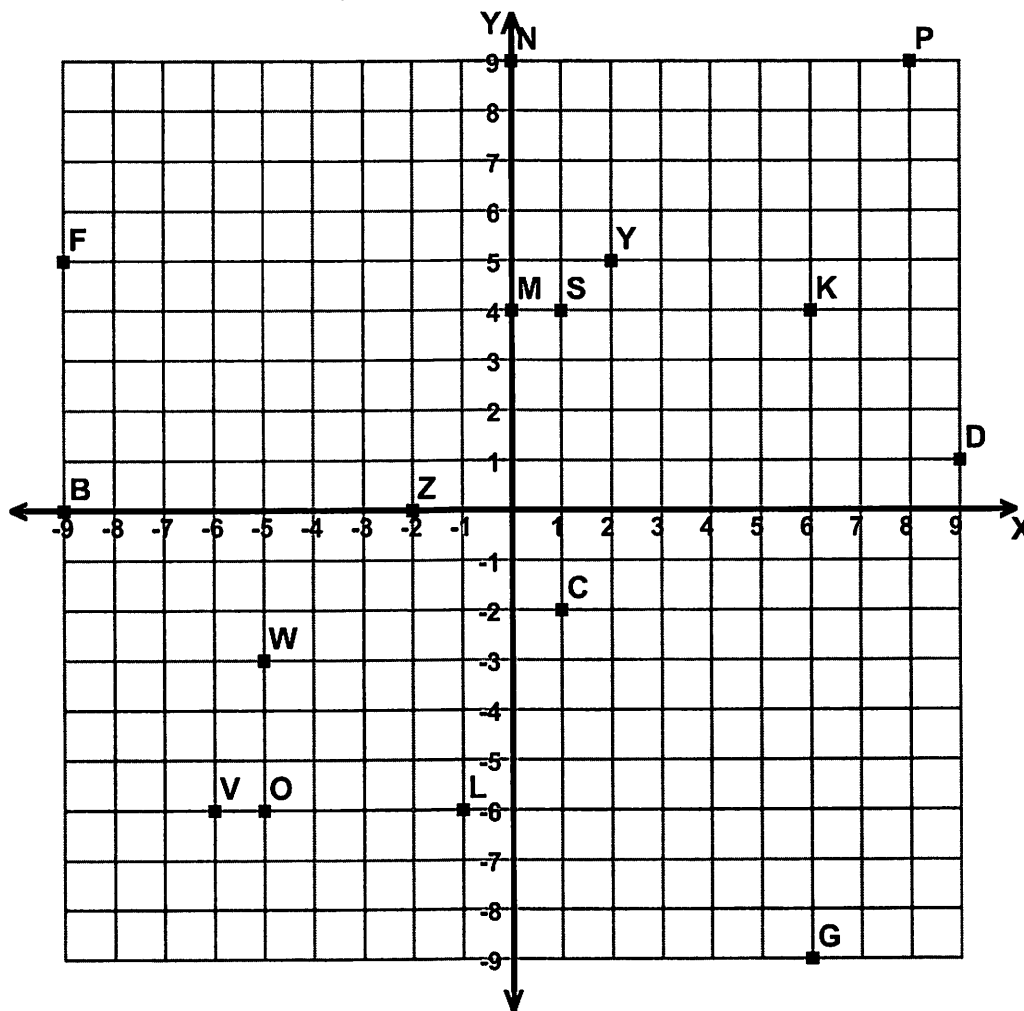
Name : \_\_\_\_\_

Score : \_\_\_\_\_

Teacher : \_\_\_\_\_

Date : \_\_\_\_\_

### Four Quadrant Ordered Pairs



Tell what point is located at each ordered pair.

- |                    |                    |                    |                    |
|--------------------|--------------------|--------------------|--------------------|
| 1) $(+2,+5)$ _____ | 3) $(+8,+9)$ _____ | 5) $(+0,+9)$ _____ | 7) $(+6,+4)$ _____ |
| 2) $(+1,+4)$ _____ | 4) $(+6,-9)$ _____ | 6) $(-1,-6)$ _____ | 8) $(+0,+4)$ _____ |

Write the ordered pair for each given point.

- |             |             |             |             |
|-------------|-------------|-------------|-------------|
| 9) W _____  | 11) Z _____ | 13) F _____ | 15) O _____ |
| 10) D _____ | 12) B _____ | 14) C _____ | 16) V _____ |


Plot the following points on the coordinate grid.

- |                 |                 |                 |                 |
|-----------------|-----------------|-----------------|-----------------|
| 17) J $(+2,+0)$ | 19) A $(-6,+5)$ | 21) U $(-1,+9)$ | 23) H $(+5,-8)$ |
| 18) X $(-4,+4)$ | 20) R $(-4,+2)$ | 22) T $(+3,-4)$ | 24) Q $(-3,+1)$ |



**ROAD BRANCH ELEMENTARY & MIDDLE SCHOOL**

**NTID/SNOW DAY PACKETS**



**Math 7**

**Day 2**