


ROAD BRANCH ELEMENTARY & MIDDLE SCHOOL

NTID/SNOW DAY PACKETS



Math 8

Day 2

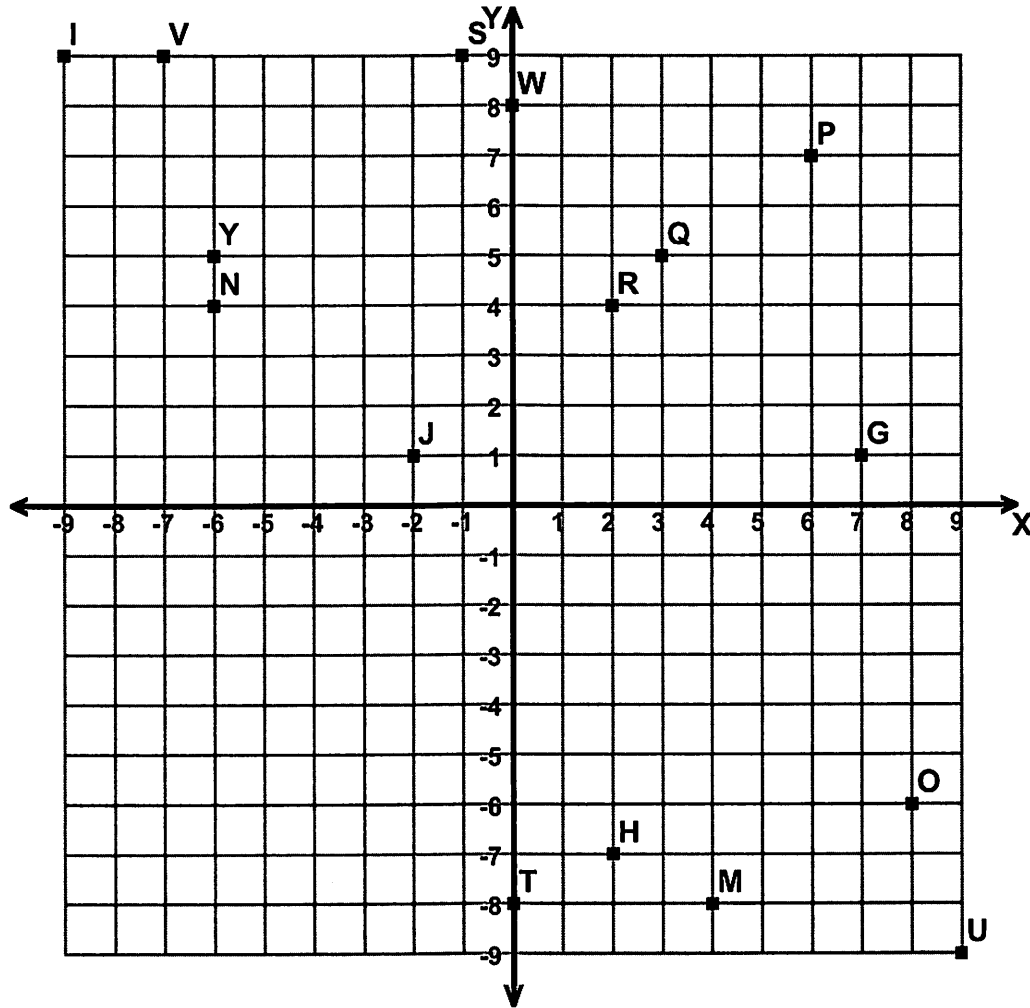
Name : _____

Score : _____

Teacher : _____

Date : _____

Four Quadrant Ordered Pairs



Tell what point is located at each ordered pair.

- | | | | |
|--------------------|--------------------|--------------------|--------------------|
| 1) $(-7,+9)$ _____ | 3) $(-6,+4)$ _____ | 5) $(-9,+9)$ _____ | 7) $(+7,+1)$ _____ |
| 2) $(+2,+4)$ _____ | 4) $(-1,+9)$ _____ | 6) $(+9,-9)$ _____ | 8) $(-6,+5)$ _____ |

Write the ordered pair for each given point.

- | | | | |
|-------------|-------------|-------------|-------------|
| 9) P _____ | 11) O _____ | 13) W _____ | 15) M _____ |
| 10) Q _____ | 12) H _____ | 14) T _____ | 16) J _____ |

Plot the following points on the coordinate grid.

- | | | | |
|-----------------|-----------------|-----------------|-----------------|
| 17) C $(-7,+0)$ | 19) K $(+3,-8)$ | 21) X $(-4,-6)$ | 23) A $(+2,-3)$ |
| 18) Z $(+4,+0)$ | 20) L $(+9,+4)$ | 22) E $(+4,-7)$ | 24) F $(-8,-6)$ |



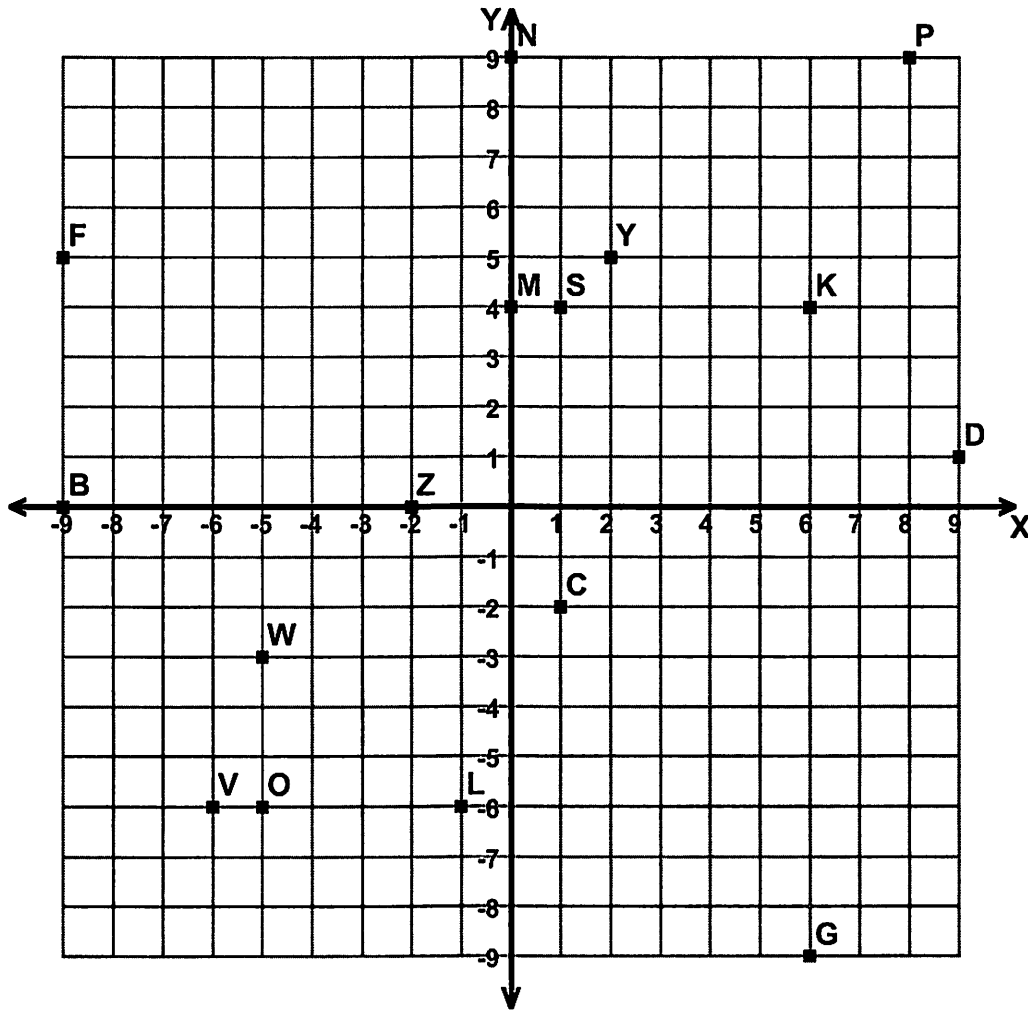
Name : _____

Score : _____

Teacher : _____

Date : _____

Four Quadrant Ordered Pairs



Tell what point is located at each ordered pair.

- | | | | |
|------------------|------------------|------------------|------------------|
| 1) (+2,+5) _____ | 3) (+8,+9) _____ | 5) (+0,+9) _____ | 7) (+6,+4) _____ |
| 2) (+1,+4) _____ | 4) (+6,-9) _____ | 6) (-1,-6) _____ | 8) (+0,+4) _____ |

Write the ordered pair for each given point.

- | | | | |
|-------------|-------------|-------------|-------------|
| 9) W _____ | 11) Z _____ | 13) F _____ | 15) O _____ |
| 10) D _____ | 12) B _____ | 14) C _____ | 16) V _____ |

Plot the following points on the coordinate grid.

- | | | | |
|---------------|---------------|---------------|---------------|
| 17) J (+2,+0) | 19) A (-6,+5) | 21) U (-1,+9) | 23) H (+5,-8) |
| 18) X (-4,+4) | 20) R (-4,+2) | 22) T (+3,-4) | 24) Q (-3,+1) |

