

Map Study
follow directions
Study the map
2 pages

Map Study
follow directions
Study the map
2 pages

NTID: Non Traditional School Day Packets. Prepared 9-11-18

Grade Level: Seventh Teacher: Dunigan

DAY 1

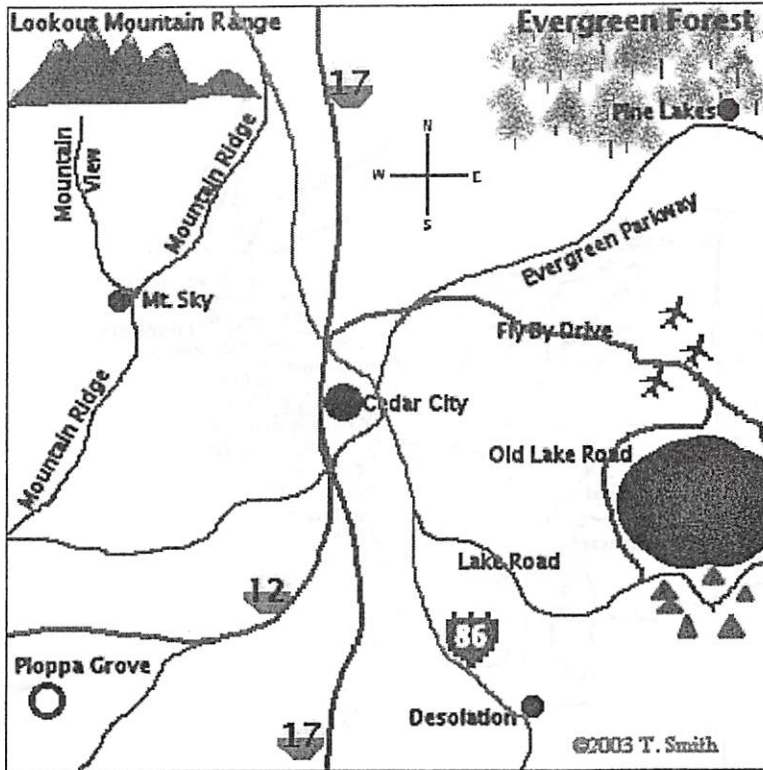
World Regions/Geography

Map Study 2 pages
follow directions
Study the map

Map Study 2 pages
follow directions
Study the map

DITU
Geography
Seventh Grade
Don T

Map Skills



Legend

- Interstate Highway
- State Highway
- Local Road
- Municipal Airport
- Population over 100,000
- Population 25,000 - 100,000
- Population under 10,000
- Camping / Picnic Area

©2003 T. Smith

Use the map and legend on this page to answer the following questions.

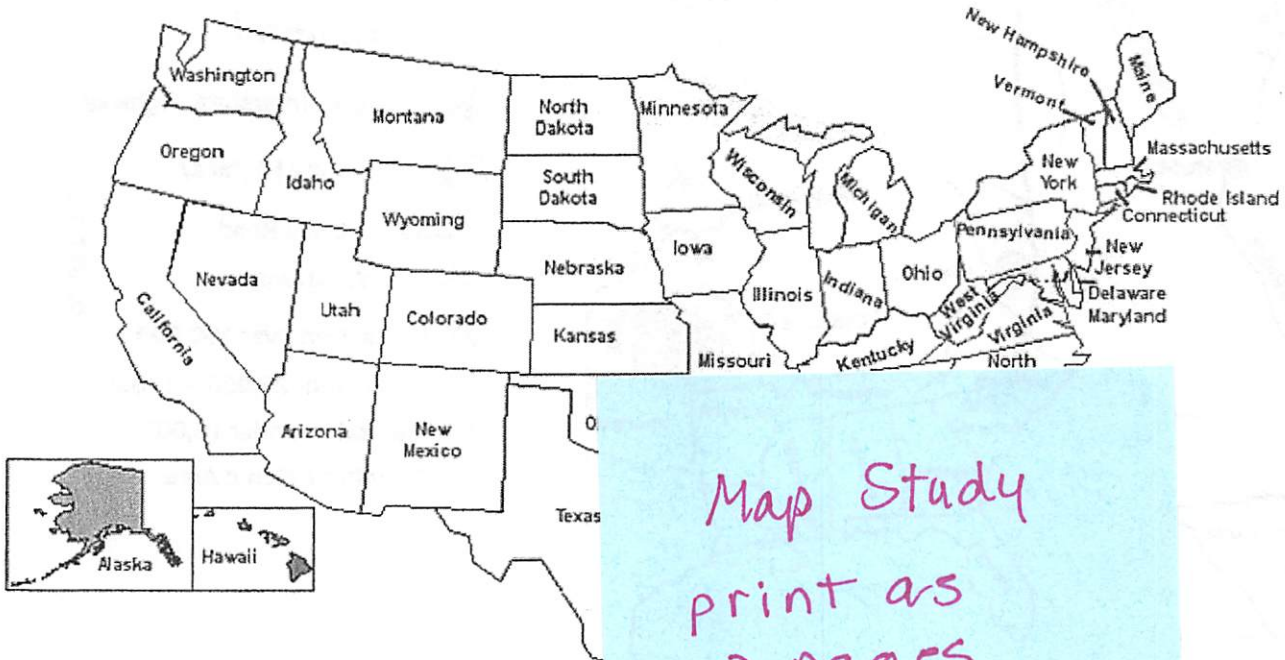
1. What city is between Pine Lakes and Ploppa grove? _____
2. Is Fly By Drive north or south of Lake Road? _____
3. What is the population of Mt. Sky? _____
4. Is the campground north or south of the airport? _____
5. In which direction does Interstate 17 run? _____
6. What town is located on State Highway 86? _____
7. What road would you take if you were heading south from Mt. Sky. _____
8. What is the population of Ploppa Grove? _____
9. What is the name of the largest city shown on the map? _____
10. What interstate highway is north of Ploppa Grove? _____
11. Desolation lies between what two roads? _____

109

Pg 2

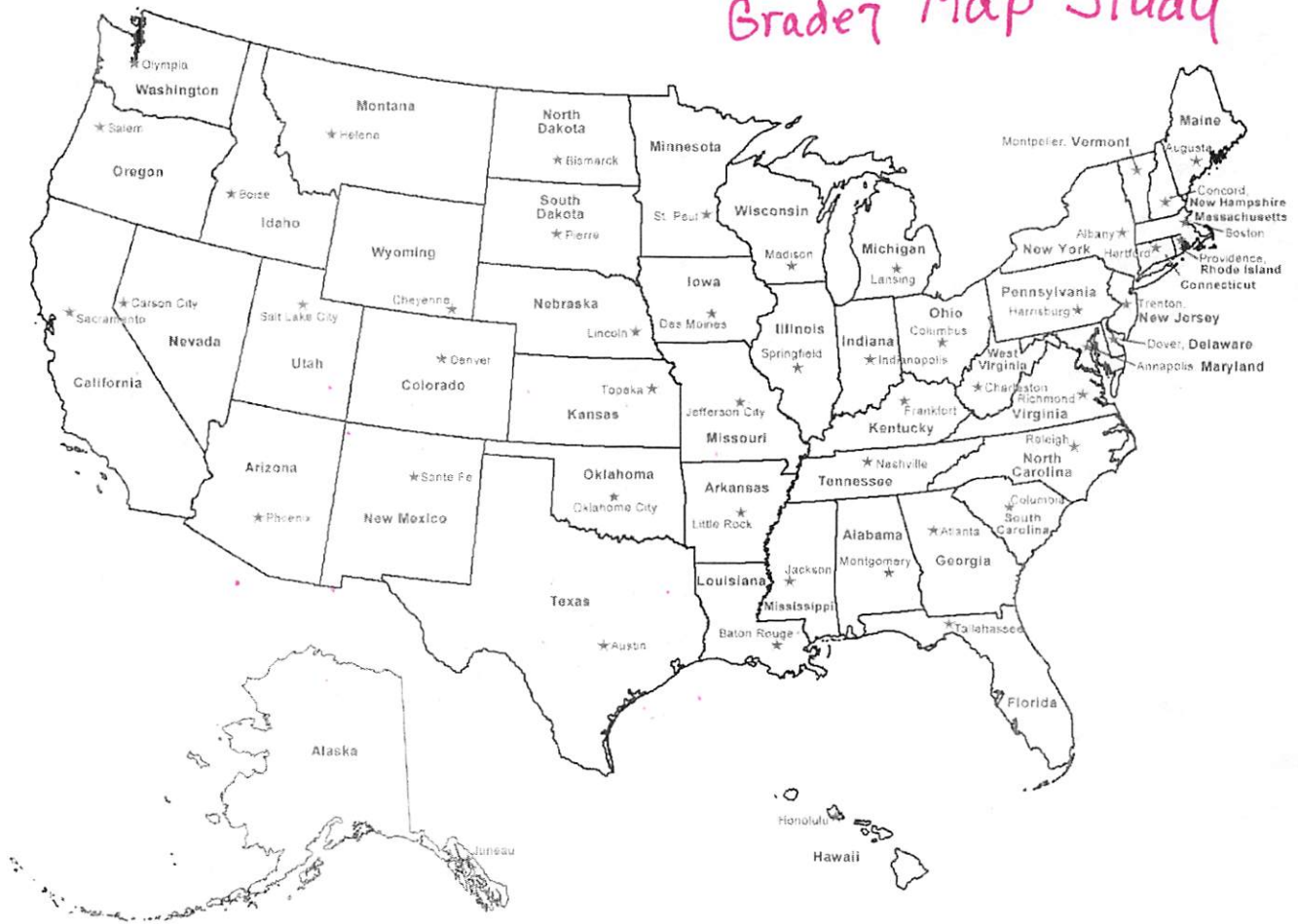
Map Study

Study the map and answer the questions.



- 1.) Which state does not share a border with Arizona?
 Nevada
 New Mexico
 Texas
 California
- 2.) Which state is west of Kansas?
 Oklahoma
 Iowa
 Missouri
 Colorado
- 3.) Which state is a peninsula?
 Illinois
 Pennsylvania
 Florida
 Utah
- 5.) Which state is south of Nebraska?
 Washington
 Oklahoma
 Maine
 Wyoming
- 6.) Which state is East of Mississippi?
 Georgia
 Louisiana
 Arkansas
 Missouri

NTID Day 1 Geography Grade 7 Map Study



Printable Maps By: WaterproofPaper.com

More Free Printables: [Calendars](#) [Maps](#) [Graph Paper](#) [Targets](#)